



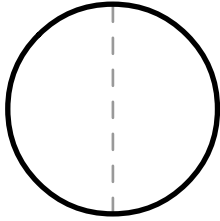
Fraction Packed

Activity Sheet

Name: _____ Class: _____

Use fractions to name the shaded areas.

1

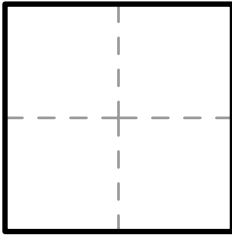


Color in one of the two parts of the circle.

How many parts did you color?

How many parts are there in total?

2

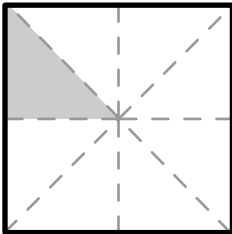


Color in one of the four parts of the square.

How many parts did you color?

How many parts are there in total?

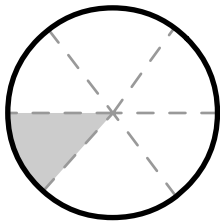
3



How many parts are shaded?

How many parts are there in total?

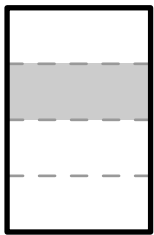
4



How many parts are shaded?

How many parts are there in total?

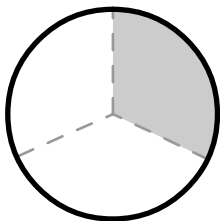
5



How many parts are shaded?

How many parts are there in total?

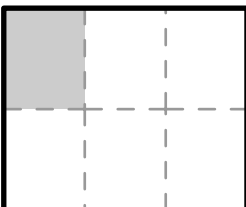
6



How many parts are shaded?

How many parts are there in total?

7



How many parts are shaded?

How many parts are there in total?

